





First Problem of the Week, due Thursday 09/14

In a working carousel, it takes 50 seconds to the carousel to complete a full loop. At the beginning, the horse is at the front; 10 seconds after, the dolphin is at the front, and so on. What animal will be at the front after 3 minutes?



- (a)  (b)  (c)  (d)  (e) 